

Please write clearly in block capitals.

Centre number

--	--	--	--	--

Candidate number

--	--	--	--

Surname

Forename(s)

Candidate signature

GCSE COMBINED SCIENCE: TRILOGY

F

Foundation Tier
Chemistry Paper 2F

Wednesday 12 June 2019

Morning

Time allowed: 1 hour 15 minutes

Materials

For this paper you must have:

- a ruler
- a scientific calculator
- the periodic table (enclosed).

Instructions

- Use black ink or black ball-point pen.
- Fill in the boxes at the top of this page.
- Answer **all** questions in the spaces provided.
- Do all rough work in this book. Cross through any work you do not want to be marked.
- In all calculations, show clearly how you work out your answer.

Information

- The maximum mark for this paper is 70.
- The marks for questions are shown in brackets.
- You are expected to use a calculator where appropriate.
- You are reminded of the need for good English and clear presentation in your answers.

For Examiner's Use	
Question	Mark
1	
2	
3	
4	
5	
6	
7	
TOTAL	



0 1 . 1 This question is about gases.

Draw **one** line from each substance to the description of the substance.

[3 marks]

Substance	Description of substance
	Compound
Air	Element
Carbon dioxide	Hydrocarbon
Oxygen	Metal
	Mixture



0 1 . 2 What is used to test for each of the gases?

Draw **one** line from each gas to the test for the gas.

[2 marks]

Gas	Test
	A glowing splint
Carbon dioxide	A lighted splint
Oxygen	Limewater
	Litmus paper

0 1 . 3 Give **two** reasons why the percentage of carbon dioxide in the air has decreased in the last 2.7 billion years.

[2 marks]

Tick (✓) **two** boxes.

Combustion

Dissolved in oceans

Intense volcanic activity

Photosynthesis

Respiration

Turn over ►



Oxygen reacts with sulfur dioxide.

The reaction is reversible.

0 1 . 4 What is the symbol for a reversible reaction?

[1 mark]

0 1 . 5 Complete the sentence.

[1 mark]

In a reversible reaction the forward reaction is exothermic, so the
reverse reaction is _____.

0 1 . 6 A reversible reaction happens in apparatus which stops the escape of reactants
and products.

Complete the sentence.

[1 mark]

Equilibrium is reached when the forward and reverse reactions happen at
exactly the same _____.



Turn over for the next question

*Do not write
outside the
box*

**DO NOT WRITE ON THIS PAGE
ANSWER IN THE SPACES PROVIDED**

Turn over ►



0 2

Concrete contains cement, water, sand and small stones.

0 2 . 1

Concrete is a mixture designed as a useful product.

What do we call a mixture which has been designed as a useful product?

[1 mark]Tick (✓) **one** box.

Finite

Formula

Formulation

Fraction

0 2 . 2

Concrete contains cement.

Cement is made by heating a mixture containing silicon dioxide (SiO_2).

Why does silicon dioxide have a very high melting point?

[2 marks]Tick (✓) **two** boxes.

It has a giant structure

It has a simple molecular structure

It has strong covalent bonds

It has strong ionic bonds

It has weak intermolecular forces

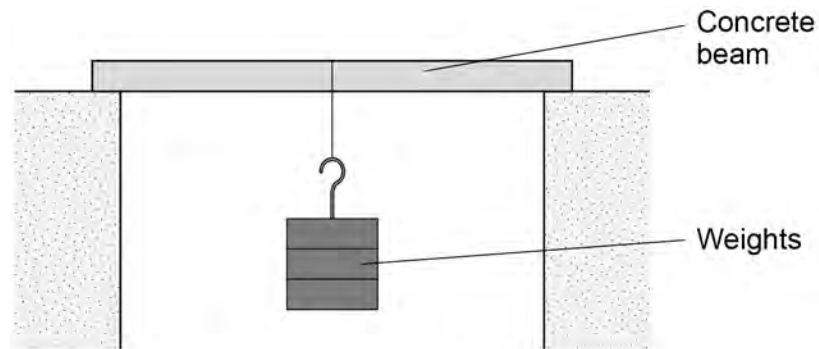


Student **A** investigated how the mass of the small stones in concrete affects the strength of a concrete beam. All other variables were kept the same.

The student added weights until the concrete beam broke.

Figure 1 shows the apparatus Student **A** used.

Figure 1



0 2 . 3 Draw **one** line from each type of variable to the correct example of the variable.

[2 marks]

Type of variable

Example of variable

Control

Length of concrete beam

Independent

Mass of small stones in concrete

Time taken to add weights

Weight needed to break concrete beam

Turn over ►



Table 1 shows Student **A**'s results.

Table 1

Mass of small stones in grams (g)	Weight needed to break concrete beam in newtons (N)
500	70
1000	100
1500	110
2000	100
2250	85
2500	65
2750	35

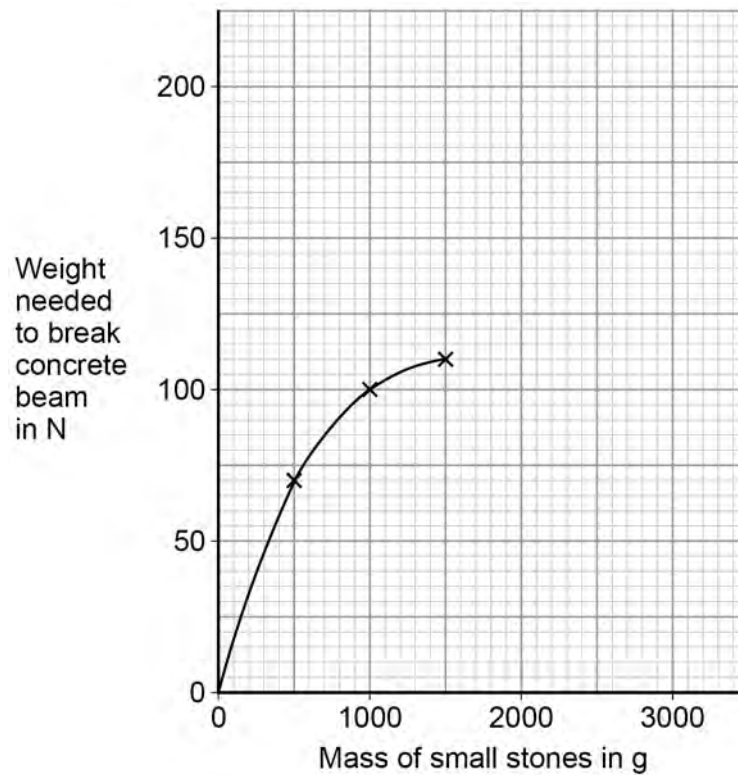
0 2 . 4 Plot the data from **Table 1** on **Figure 2**.

The first three points are plotted for you.

Draw the line of best fit.

[3 marks]

Figure 2



0 2 . 5

What mass of small stones would be needed to make the strongest concrete?

Give a reason for your answer.

Use **Figure 2**.

[2 marks]

Mass = _____ g

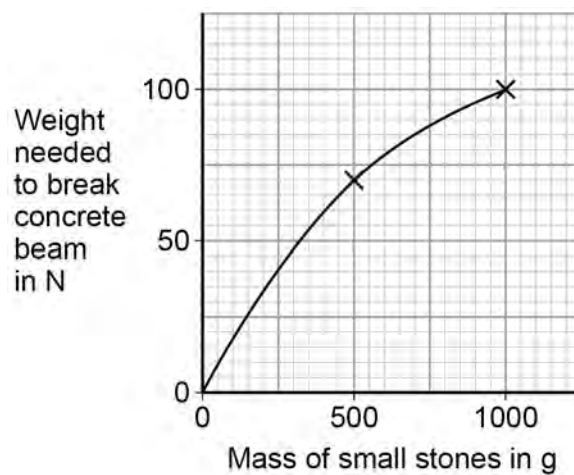
Reason _____

0 2 . 6

Student **B** did a similar investigation.

Figure 3 shows Student **B**'s results.

Figure 3



How could Student **B** improve their investigation?

Use **Figure 2** and **Figure 3**.

[1 mark]

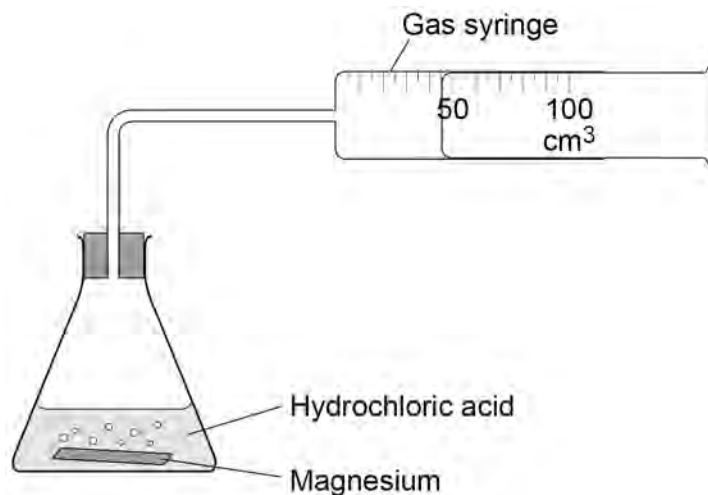


0 3

A student investigated the rate of the reaction between magnesium and hydrochloric acid.

Figure 4 shows the apparatus the student used.

Figure 4



0 3 . 1

Balance the equation for the reaction.

[1 mark]



0 3 . 2

The student used 50 cm³ of hydrochloric acid.

Which apparatus would measure 50 cm³ of hydrochloric acid with the greatest accuracy?

[1 mark]

Tick (✓) **one** box.

50 cm³ beaker

50 cm³ conical flask

50 cm³ measuring cylinder



0 3 . 3 The student measured the volume of gas produced every 20 seconds for 2 minutes.

The volume of gas was zero at the start of the experiment.

The measured volumes of gas were:

26 cm³ 38 cm³ 47 cm³ 55 cm³ 59 cm³ 60 cm³

Complete **Table 2** to show these results.

[4 marks]

Table 2

0	0

0 3 . 4 The volumes of gas were lower than expected.

Suggest **one** reason.

[1 mark]

0 3 . 5 The student repeated the experiment using different concentrations of hydrochloric acid.

Give **two** variables the student should keep the same.

[2 marks]

1

2

Turn over ►



0 3 . 6 Complete the sentences.

[3 marks]

As the concentration of the hydrochloric acid increased, the
rate of the reaction _____ .

This is because there were more acid _____ in each
cubic centimetre (cm³).

So the collisions happened more _____ .

12



0 4

Large hydrocarbon molecules can be cracked to produce smaller, more useful molecules.

Alkanes and alkenes are produced when hydrocarbons are cracked.

0 4 . 1

Give **two** conditions used for cracking.

[2 marks]

1 _____

2 _____

0 4 . 2

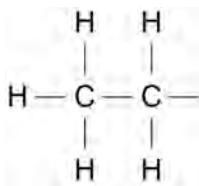
Butane (C_4H_{10}) is an alkane.

Figure 5 shows part of the displayed structural formula of butane.

Complete the displayed structural formula of butane in **Figure 5**.

[1 mark]

Figure 5



0 4 . 3

Butane burns in oxygen.

Complete the word equation for the complete combustion of butane.

[2 marks]

butane + oxygen → _____ + _____

Question 4 continues on the next page

Turn over ►



0 4 . 4 Ethene is an alkene.

Give a test for alkenes.

Give the result of the test if an alkene is present.

[2 marks]

Test _____

Result _____

0 4 . 5 Each year many tonnes of crude oil are extracted from the Earth.

It took millions of years for the crude oil to be formed.

What do we call development that meets the needs of current generations without compromising the resources for future generations?

[1 mark]

Tick (✓) **one** box.

Finite development

Global development

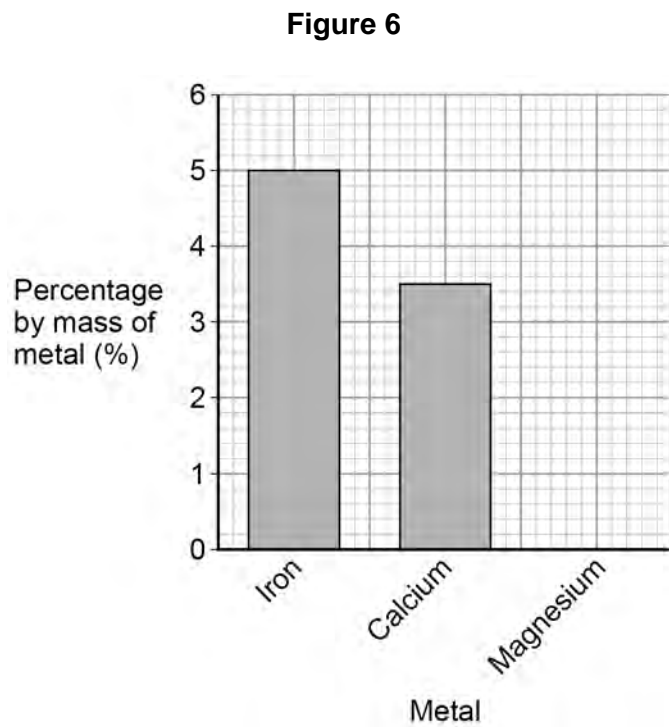
Natural development

Sustainable development



0 5

Figure 6 shows the percentage by mass of some metals in the Earth's crust.



0 5 . 1

What is the percentage by mass of calcium in the Earth's crust?

[1 mark]

Tick (✓) **one** box.

3.25% 3.50% 4.50% 5.00%

0 5 . 2

The percentage by mass of magnesium in the Earth's crust is 2.1%

Draw the bar for magnesium on **Figure 6**.

[1 mark]

Question 5 continues on the next page

Turn over ►




0 5 . 3

Copper sulfate is produced during the extraction of copper from the Earth's crust.

Copper is produced from copper sulfate solution using iron.

The word equation for the reaction is:



From the equation a company calculated that 648 kg of copper sulfate are needed to produce 617 kg of iron sulfate and 258 kg of copper.

Calculate the mass of iron needed to make 258 kg of copper.

[2 marks]

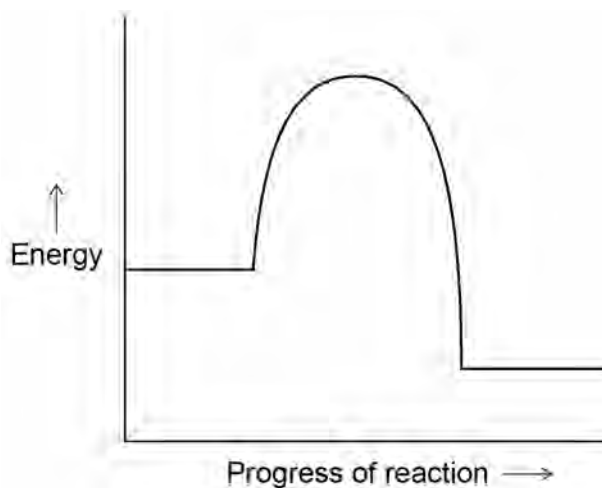
Mass = _____ kg



Copper is used as a catalyst.

0 5 . 4 **Figure 7** shows the reaction profile for a reaction without a catalyst.

Figure 7

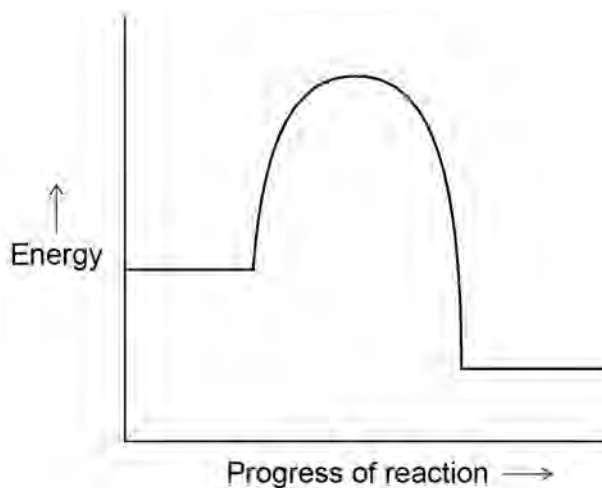


Draw an arrow on **Figure 7** to show the activation energy.

[1 mark]

0 5 . 5 The reaction profile for the reaction without a catalyst is shown again in **Figure 8**.

Figure 8



Draw a reaction profile on **Figure 8** for the same reaction with a catalyst.

[2 marks]

Turn over ►



0 5 . 6 What are catalysts in biological systems called?

[1 mark]

Tick (✓) **one** box.

Detergents

Enzymes

Polymers

Solvents

8



0 6

Water that is safe to drink contains dissolved substances.

0 6 . 1

What do we call water that is safe to drink?

[1 mark]Tick (✓) **one** box.

Desalinated

Filtered

Fresh

Potable

0 6 . 2

Describe a test for pure water.

Give the result of the test if the water is pure.

[2 marks]

Test _____

Result _____

Question 6 continues on the next page**Turn over ►**

0 6 . 3

Describe a method to determine the mass of dissolved solids in a 100 cm³ sample of river water.

[4 marks]

0 6 . 4

A sample of river water contains 125 mg per dm³ of dissolved solids.

Calculate the mass of dissolved solids in grams in 250 cm³ of this sample of river water.

Give your answer to 2 significant figures.

[4 marks]

Mass of dissolved solids = _____ g



0	6	.	5
---	---	---	---

A water company allows a maximum of 500 mg per dm³ of sulfate ions in drinking water.

A sample of drinking water contains 44 mg per dm³ of sulfate ions.

Calculate the percentage (%) of the maximum allowed mass of sulfate ions in the sample of drinking water.

[2 marks]

Percentage (%) of the maximum allowed mass = _____ %

13

Turn over for the next question

Turn over ►



0	7
---	---

This question is about atmospheric pollutants from fuels.

0	7	.	1
---	---	---	---

Fuel burns in a car engine.

Describe how oxides of nitrogen are produced in a car engine.

[2 marks]



0 7 . 2 Table 3 shows the carbon footprint during the manufacture and use of three cars.

Table 3

Car	Mass of CO ₂ produced during manufacture in kg	Mass of CO ₂ produced when driving in kg per km	Total mass of CO ₂ produced from manufacture and 40 000 km driving in kg	Total mass of CO ₂ produced from manufacture and 100 000 km driving in kg
Car A	14 000	0.123	18 920	26 300
Car B	20 000	0.085	23 400	28 500
Car C	23 000	0.044	24 760	27 400

Evaluate the carbon footprint of the cars.

Use information from **Table 3**.

[6 marks]

END OF QUESTIONS



There are no questions printed on this page

*Do not write
outside the
box*

**DO NOT WRITE ON THIS PAGE
ANSWER IN THE SPACES PROVIDED**

Copyright information

For confidentiality purposes, from the November 2015 examination series, acknowledgements of third-party copyright material are published in a separate booklet rather than including them on the examination paper or support materials. This booklet is published after each examination series and is available for free download from www.aqa.org.uk after the live examination series.

Permission to reproduce all copyright material has been applied for. In some cases, efforts to contact copyright-holders may have been unsuccessful and AQA will be happy to rectify any omissions of acknowledgements. If you have any queries please contact the Copyright Team, AQA, Stag Hill House, Guildford, GU2 7XJ.

Copyright © 2019 AQA and its licensors. All rights reserved.



2 4



1 9 6 G 8 4 6 4 / C / 2 F

IB/M/Jun19/8464/C/2F